

A quick look back 9

1. Count on 10.

$$24 \rightarrow \boxed{}$$

2. Count back 10.

$$\boxed{} \leftarrow 69$$

- 3.

27 rounds to $\boxed{}$.

- 4.

44 rounds to $\boxed{}$.

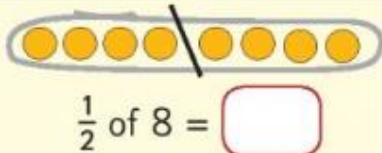
- 5.

$$33 + 6 = \boxed{}$$

- 6.

$$26 = \boxed{} \text{ tens} + \boxed{} \text{ units}$$

- 7.



- 8.

It is half past $\boxed{}$.



- 9.

$$20c + \boxed{}c = 25c$$

- 10.



How much change did I get from 20c when I bought the apple? $\boxed{}c$

11. How much

money altogether? $\boxed{}c$



12. Colour the shape that can't roll.



- 13.

$$29 - 3 = \boxed{}$$

14. Write the missing numbers.

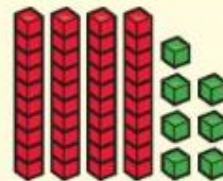


- 15.

$$9 + 8 = \boxed{}$$

16. Write the correct


number of cubes $\boxed{}$.



17. Colour the 4th duck.



- 18.



$$\boxed{} + \boxed{} + \boxed{} = \boxed{}$$

- 19.

$$15 - \boxed{} = 6$$

20. I have 7 tens and 8 units.

I am $\boxed{}$.

