











## Monday

- $$\begin{array}{r} t\ u \\ 4\ 2 \\ +2\ 3 \\ \hline \end{array}$$
- 78, 79, , 81, , 83
- $20 - 11 =$
- $59 + 10 =$
- What month comes after June?
- This clock shows   
 past .
- How much? 
- Circle the units in 45.
- A bathtub holds:  
☐ more than 1 litre.  
☐ less than 1 litre.  
☐ about 1 litre.
 
- $5 + 6 + 5 =$
- The Murphy family have 70 fingers between them. How many people are in the Murphy family?
- Shane has 45 toy cars. Rory has 17 more cars than Shane. How many toy cars has Rory?





/12



















## Tuesday

- 10, 12, , , , 20
- Circle the tens in 61.
- Write the numeral ninety-six.
- Write the smallest domino number that can be made.  
- Count in 10s up to 100.  
 10, 20, , , , ,  
, , , 100
- Circle the largest number.  
**85 58 96**
- I had 50c. I spent 30c. I have  left.
- Write 64 in words.
- A cake cut in half is cut into  pieces. 
- A house is:  
☐ heavier than 1kg.  
☐ lighter than 1kg.  
☐ about 1kg.
 
- 



- How much does it cost to buy an apple and a pear?
- Find the cost of a banana and an orange.

/12





## Wednesday

- 100, 90, , ,
- Write 99 in words.
- I have 8 tens and 4 units. I am .
- Write these numbers in order, starting with the smallest:  
36, 89, 42. , ,
- This clock shows   
 past .
- I had 20c. I spent 8c. I have  left.
- I had 17 bananas. I ate 3. I have  bananas left.
- $7 + 7 +$    $= 18$
- Colour the shape that has one side.  
  
- $18 - 3 =$
- I eat three meals a day: breakfast, lunch and dinner. How many meals do I eat in a week?
- Cars in a car park**

|   |   |   |   |   |   |   |
|---|---|---|---|---|---|---|
|  |  |  |  | <input type="text"/>  | <input type="text"/>  | <input type="text"/>  |
|  |  |  |  |  |  |  |
|  |  |  |  |  |  |  |
- How many cars are in the car park altogether?

/12

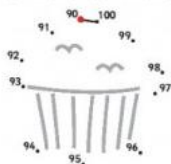
## Thursday

- A tennis ball is shaped like a:   
☐ cube. ☐ cylinder. ☐ sphere.
- Write these numbers in order, starting with the largest:  
10, 80, 30. , ,
- $9 +$    $= 14$
- Circle the odd number.  
**5 8 10**
- Andrew has 12c. Ava has 15c. Ava has  more than Andrew.
- One less than 100 is .
- $90 + 10 =$
- I am:  
☐ heavier than 1kg.  
☐ lighter than 1kg.  
☐ about 1kg.
- $14 - 8 =$
- Finish drawing this cylinder. 
- Ned has:   
 Mary has:   
 How much money have Ned and Mary altogether?
- How much more money has Ned than Mary?

/12

## Week 27 Test

1. Join the dots 90 to 100 to make a picture.



2. 5, 10, , 20,

3. Write the numeral ninety-nine.

4. I had 20c. I spent 16c.  
I had  left.

5.  $9 + 3 + \text{$  = 15

6.  $20 - 11 = \text{$

7. 13 is larger than 8 by .

8. Finish the pattern.



9.  $53 + 10 = \text{$

10.  $\begin{array}{r} t \ u \\ 3 \ 1 \\ + 1 \ 4 \\ \hline \end{array}$

11. Half an hour later than the time shown on this clock is



12. A watch usually measures:

- ☐ more than 1 metre.  
☐ less than 1 metre.  
☐ about 1 metre.

### Problems

13. Draw the tally marks for the pets in the pet shop.

|         |                      |
|---------|----------------------|
| rabbits | <input type="text"/> |
| dogs    | <input type="text"/> |
| cats    | <input type="text"/> |

### Pets in a pet shop



14. How many pets altogether are in the pet shop?

15. How many more cats than rabbits are in the pet shop?

**WEEK 27****Monday**

1. 65
2. 80, 82
3. 9
4. 69
5. July
6.  $\frac{1}{2}$  past 2
7. 69c
8. 5
9. more than 1 litre
10. 16
11. 7
12. 62

**Tuesday**

1. 14, 16, 18
2. 6
3. 96
4. 29
5. 30, 40, 50, 60, 70, 80, 90
6. 96
7. 20c
8. sixty-four
9. 2
10. heavier than 1kg
11. 29c
12. 33c

**Wednesday**

1. 80, 70, 60
2. ninety-nine
3. 84
4. 36, 42, 89
5.  $\frac{1}{2}$  past 8
6. 12c
7. 14
8. 4
9. circle
10. 15
11. 21
12. 16

**Thursday**

1. sphere
2. 80, 30, 10
3. 5
4. 5
5. 3c
6. 99
7. 100
8. heavier than 1kg
9. 6
10. ----
11. 98c
12. 54c

**WEEK 27 – TEST**

1. ----
2. 15, 25
3. 99
4. 4c
5. 3
6. 9
7. 5
8. blue star, blue star
9. 63
10. 45
11. 8 o'clock
12. less than 1 metre

**Problems**

13. ----
14. 18
15. 2